

Name _____

Date _____

**Interpreting
Illustrations**

Section 1.1

Use with textbook pages 8-15.

What is wrong with this picture?

There are many unsafe situations in the science lab shown below. In the first column of the chart, identify seven unsafe situations. In the second column, describe an injury that might occur as a result of each situation.



Unsafe situation	Possible injury
1.	
2.	
3.	
4.	
5.	
6.	
7.	

Name _____




Date _____

Use with textbook pages 12-15.

What is WHMIS?

In the second column, write the name of each WHMIS symbol. Then choose the correct meaning of the symbol from the list below. Write the meaning in the third column.

- ◆ Likely to cause illness or death if ingested or spilled on skin
- ◆ Will readily burst into flame
- ◆ May readily react with other substances to produce harmful effects
- ◆ Will corrode substances with which it comes in contact, including human flesh

WHMIS symbol	Name of the symbol	What the symbol means
1. 		
2. 		
3. 		
4. 